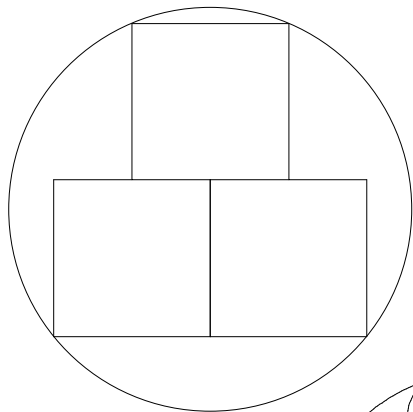
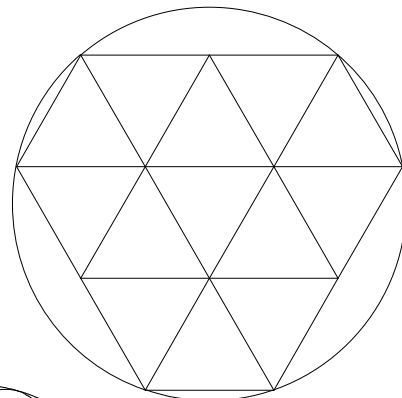


Problem
242


by David Lindell, LS



(a)



(b)



(c)

The squares in (a) are one unit on a side.
The equilateral triangles in (b) are one unit on a side.
The circles in (c) are unit radii.
(All are drawn to different scales.)
What are the circumscribed radii?